


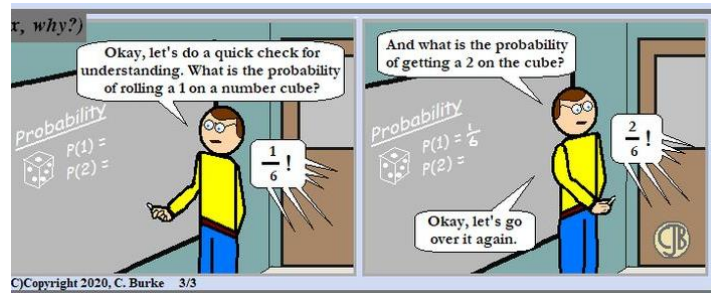
Name: _____

Problem	1 / 2 / 3	4 / 5	6	7 / 8	Total
Possible	31	30	26	13	100
Received					


DO NOT OPEN YOUR EXAM UNTIL TOLD TO DO SO.

You may use a 3 x 5 card of notes, both sides, and a calculator.

FOR FULL CREDIT, SHOW ALL WORK RELATED TO FINDING EACH SOLUTION.



"If there are 7 cats in a sack and I draw one at random,..."



"... what is the probability that I will draw you?"

14 points 1. Suppose we roll two 5-sided dice, numbered 1 to 5. We are interested in the sum.

Event E is “sum is ≥ 6 ”

Event F is “sum is odd”

/2 $\Pr(E) =$

/2 $\Pr(F) =$

/2 $\Pr(E \cap F) =$

/2 $\Pr(E \cup F) =$

/2 $\Pr(E|F) =$

/2 $\Pr(F|E) =$

/2 Are events E and F independent? Explain why or why.

		Sum of 2 dice				
		1	2	3	4	5
1	2	3	4	5	6	
2	3	4	5	6	7	
3	4	5	6	7	8	
4	5	6	7	8	9	
5	6	7	8	9	10	

12 points 2. Suppose that $\Pr(E) = .4$, $\Pr(F) = .5$, $\Pr(E \cap F) = .2$.

Find each of the following.

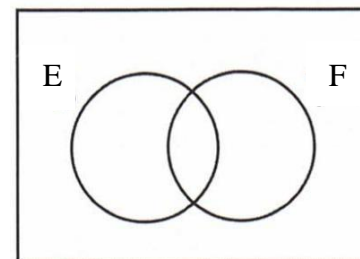
/2 $\Pr(E \cup F) =$

/2 $\Pr(E' \cap F) =$

/3 $\Pr(F|E') =$

/3 $\Pr(E'|F') =$

/2 Are events E and F independent? Explain why or why not.



5 points 3. Suppose 4 persons each randomly, independently choose a number between 1 and 20. What is the probability that 2 or more of their numbers match?

You do **NOT** need to simplify your answers on this page (except the last two problems).

15 points 4. Suppose that 10 standard (6-sided, with numbers 1 to 6) dice are rolled. What is the probability that you get:

/3 No 4's:

/5 Three 4's:

/3 At least one 4:

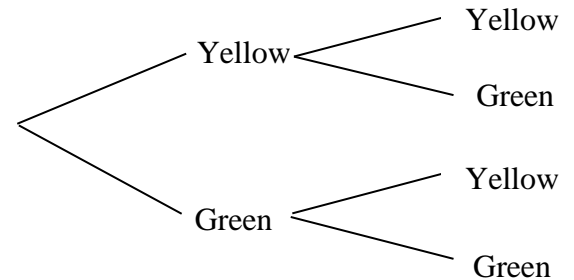
/4 Suppose that someone tells you that at least one die is a 4. What is the probability that you got exactly three 4's?

15 points 5. Suppose you select balls from a bin which contains 4 yellow and 6 green balls.

/3 If you select 4 balls, one at a time (without replacement) what is the probability of selecting a green ball and then a yellow ball and then two green balls?

/4 If you select 4 balls, all at the same time (i.e. not one at a time), what is the probability of selecting three yellow balls and one green ball (and order doesn't matter)?

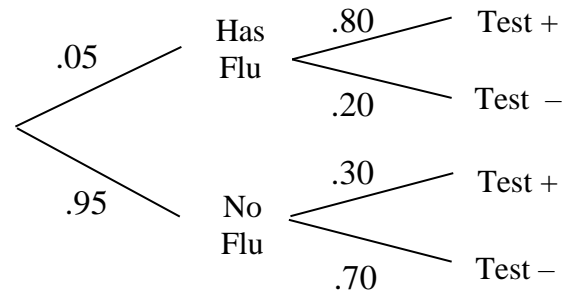
/4 Now, if you select 2 balls, first one and then the other, but you don't see the color of the first ball, what is the probability that the second ball is yellow? (Show all pertinent work. Don't just guess/give an answer.) **DO simplify this answer.**



/4 If you select 2 balls, first one and then the other, if the second ball is yellow, what is the probability that the first ball is green? (Show all pertinent work.) **DO simplify this answer.**

You **DO** need to simplify your answers on this page.

26 points 6. Suppose for a certain group of people, 5% of them have the Flu, and suppose that a certain test which is used to determine whether a person has the Flu gives false negatives 20% of the time and false positives only 10% of the time.



Simplify your answers and fill in the following table. Be sure to **show all pertinent work below.**

		Results of test		
		No Test	Positive	Negative
/8	Pr(Has Flu)	.05		
/8	Pr(Doesn't have Flu)	.95		

For example, $\Pr(\text{Flu} \mid - \text{Test})$

/5 What is the probability that a randomly selected person who has tested positive once would test negative if he/she were tested again?

/5 What is the probability that a randomly selected person who tests positive once and negative once actually has the Flu?

8 points 7. Experience shows that younger drivers are more likely to have accidents, and similarly for the very elderly. Consider the information at right for a car insurance company.

Age group	Fraction of all policy holders	Fraction of group in accidents A each year
16 – 24	.20	.10
25 – 64	.60	.03
65 –	.20	.05

/3 What fraction of their policy holders are in a car accident each year. That is, what is $\Pr(A)$, where A is the event of being in an accident?

/5 If a policy holder calls in and says they were in an accident, what is the probability they are part of the 25 – 64 age group?

5 points 8. Consider four boxes. Two of the boxes contain two gold coins each, one box contains a gold coin and one silver coin, and one box contains two silver coins. Suppose that you select a box at random and then select a coin at random from that box. If the coin is gold, what is the probability that the other coin in the box is gold?